

5/7/2020: Final Practice C

Your Name:

- Solutions are submitted as PDF handwritten in a file called after your name. Capitalize the first letters like OliverKnill.pdf. The paper has to **feature your personal handwriting** and contain no typed part. If you like, you can start writing on a new paper. For 1), you could write 1: False, 2: False \dots 20: False. Sign your paper.
- No books, calculators, computers, or other electronic aids are allowed. You can use one page of your own handwritten notes when writing the paper. It is your responsibility to submit the paper on time and get within that time also a confirmation.

| | | |
|--------|--|-----|
| 1 | | 20 |
| 2 | | 10 |
| 3 | | 10 |
| 4 | | 10 |
| 5 | | 10 |
| 6 | | 10 |
| 7 | | 10 |
| 8 | | 10 |
| 9 | | 10 |
| 10 | | 10 |
| 11 | | 10 |
| 12 | | 10 |
| 13 | | 10 |
| Total: | | 140 |

Problem 1) TF questions (20 points). No justifications are needed.

- 1) T F The definite integral $\int_0^{2\pi} \sin^2(5x) dx$ is zero.
- 2) T F The intermediate value theorem assures that the function $\exp(\sin(x))$ has a root in the interval $(0, 2\pi)$.
- 3) T F $\frac{d}{dx} \cos(4x) = -4 \sin(4x)$.
- 4) T F If $f''(1) < 0$ then 1 is a local maximum of f .
- 5) T F The derivative of $1/x$ is $\log(x)$ for all $x > 0$.
- 6) T F The limit of $\sin(3x)/(5x)$ for $x \rightarrow 0$ exists and is equal to $3/5$.
- 7) T F The function $(e^t - 1)/t$ has the limit 1 as t goes to zero.
- 8) T F The derivative of $f(f(x))$ is $f'(f(x))$ for any differentiable function f .
- 9) T F A monotonically increasing function f has no point x , where $f'(x) < 0$.
- 10) T F The function $f(x) = \exp(-x^2)$ has an inflection point x somewhere on the real line.
- 11) T F The function $f(x) = (1 - x^3)/(1 + x)$ has a limit for $x \rightarrow -1$.
- 12) T F If we know the marginal cost for all quantities x as well as the total cost for $x = 1$ we know the total cost for all x .
- 13) T F The function f which satisfies $f(x) = 0$ for $x < 0$ and $f(x) = e^{-x}$ for $x \geq 0$ is a probability density function.
- 14) T F The differentiation rule $(f \cdot g)' = f'(g(x)) \cdot g'(x)$ holds for all differentiable functions f, g .
- 15) T F Hôpital's rule assures that $\cos(x)/\sin(x)$ has a limit as $x \rightarrow 0$.
- 16) T F A Newton step for the function f is $T(x) = x - \frac{f(x)}{f'(x)}$.
- 17) T F The family of functions $f_c(x) = cx^2$ where c is a parameter has a catastrophe at $x = 0$.
- 18) T F The fundamental theorem of calculus implies $\int_{-x}^x f'(t) dt = f(x) - f(-x)$ for all differentiable functions f .
- 19) T F If f is a smooth function for which $f''(x) = 0$ everywhere, then f is constant.
- 20) T F The function $f(x) = \sin(x)/(1 - \cos(x))$ can be assigned a value $f(0)$ such that $f(x)$ is continuous at 0.

Problem 2) Matching problem (10 points) Only short answers are needed.

We name some important concepts in this course. To do so, please complete the sentences with one or two words. Each question is one point.

| | | |
|--|--|-----------|
| $\lim_{h \rightarrow 0} \frac{f(x+h) - f(x)}{h}$ is called the | | of f . |
| $f'(x) = 0, f''(x) > 0$ implies that x is a | | of f . |
| The sum $\frac{1}{n}[f(0) + f(1/n) + f(2/n) + \cdots + f((n-1)/n) + f(1)]$ is called a | | sum. |
| If $f(0) = -3$ and $f(4) = 8$, then f has a root on the interval $(0, 4)$ by the | | theorem. |
| There is a point $x \in (0, 1)$ where $f'(x) = f(1) - f(0)$ by the | | theorem. |
| The expansion rate $r'(t)$ can be obtained from $d/dtV(r(t)) = -5$ by the method of | | rates. |
| The anti derivative $\int_{-\infty}^x f(t) dt$ of a probability density function f is called the | | function. |
| A point x for which $f(x) = 0$ is called a | | of f . |
| A point x for which $f''(x) = 0$ is called an | | of f . |
| At a point x for which $f''(x) > 0$, the function is called | | up. |

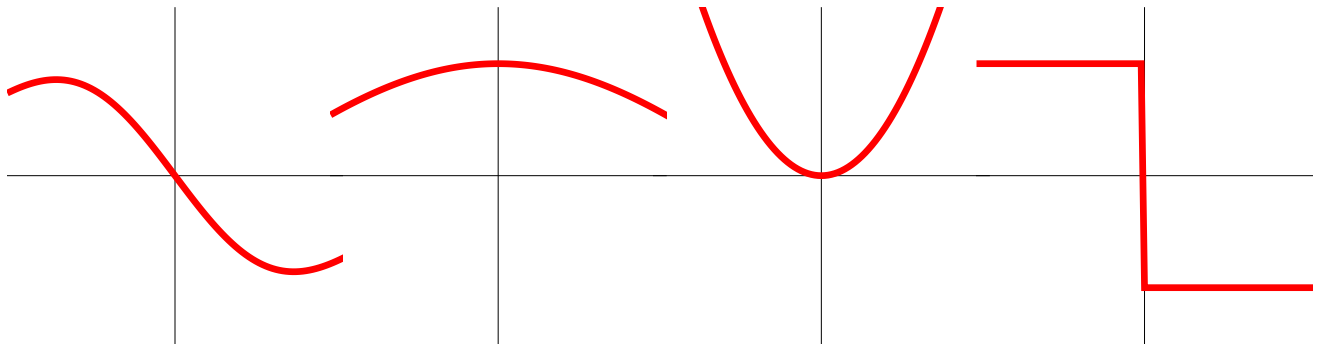
Problem 3) Matching or short answer problem (10 points). No justifications are needed.

a) (4 points) Find the relation between the following functions:

| function f | function g | $f = g'$ | $g = f'$ | none |
|------------------|-------------------|----------|----------|------|
| $\log \sin(x) $ | $\cot(x)$ | | | |
| $1/\cos^2(x)$ | $\tan(x)$ | | | |
| x^5 | $5x^4$ | | | |
| $1/x^2$ | $-1/x$ | | | |
| $\sin(\log(x))$ | $\cos(\log(x))/x$ | | | |

b) (3 points) Match the following functions (a-d) with a choice of **anti-derivatives** (1-4).

| Function a)-d) | Fill in 1)-4) |
|----------------|---------------|
| graph a) | |
| graph b) | |
| graph c) | |
| graph d) | |

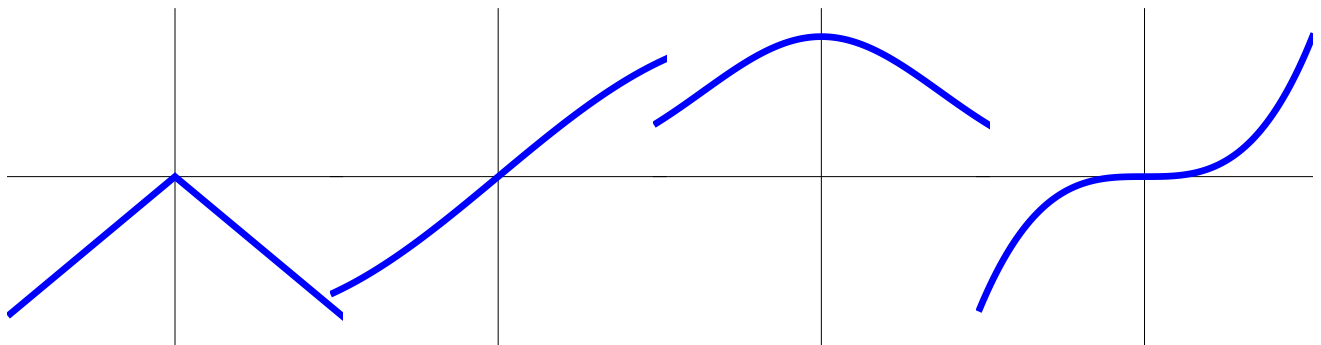


a)

b)

c)

d)



1)

2)

3)

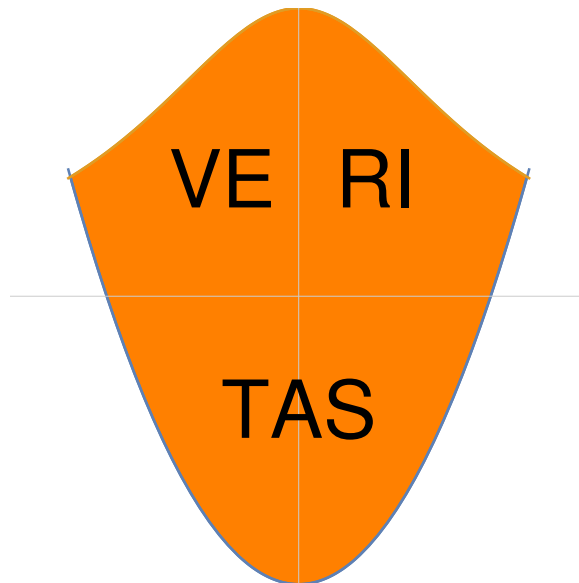
4)

c) (3 points) Find the limits for $x \rightarrow 0$

| Function f | $\lim_{x \rightarrow 0} f(x)$ |
|-----------------------------|-------------------------------|
| $x/(e^{2x} - 1)$ | |
| $(e^{2x} - 1)/(e^{3x} - 1)$ | |
| $\sin(3x)/\sin(5x)$ | |


Problem 4) Area computation (10 points)

Find the area of the shield shaped region bound by the two curves $1/(1 + x^2)$ and $x^2 - 1$.



Problem 5) Volume computation (10 points)

Did you know that there is a scaled copy of the **liberty bell** on the campus of the Harvard business school? Here we compute its volume. Find the volume of the rotationally symmetric solid if the radius $r(z)$ at height z is $r(z) = 8 - (z - 1)^3$ and the height z of the bell is between 0 and 3.



Problem 6) Improper integrals (10 points)

a) (5 points) Find the integral or state that it does not exist

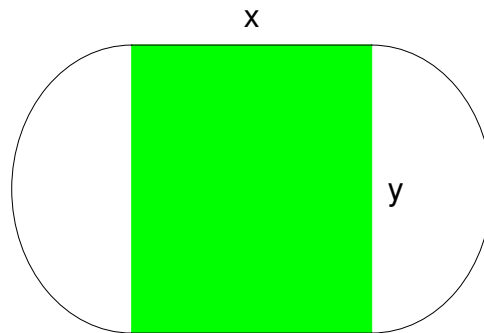
$$\int_1^{\infty} \frac{1}{x^4} dx .$$

b) (5 points) Find the integral or state that it does not exist

$$\int_1^{\infty} \frac{1}{x^{3/2}} dx .$$

Problem 7) Extrema (10 points)

The Harvard stadium has a track which encloses a rectangular field of dimensions x, y . The circumference of the track is $400 = 2\pi y + 2x$ and is fixed. We want to maximize the area xy for a play field. Which x achieves this?



Problem 8) Integration by parts (10 points)

Find the antiderivative:

$$\int (x - 1)^4 \exp(x + 1) dx .$$

Problem 9) Substitution (10 points)

a) (3 points) Solve the integral $\int e^{x^2} 2x dx$.

b) (3 points) Solve the integral $\int 2x \log(x^2) dx$.

c) (4 points) Find the integral $\int e^{-2e^x} e^x dx$.

Problem 10) Partial fractions (10 points)

a) (5 points) Find the definite integral

$$\int_1^5 \frac{1}{(x-4)(x-2)} dx .$$

b) (5 points) Find the indefinite integral

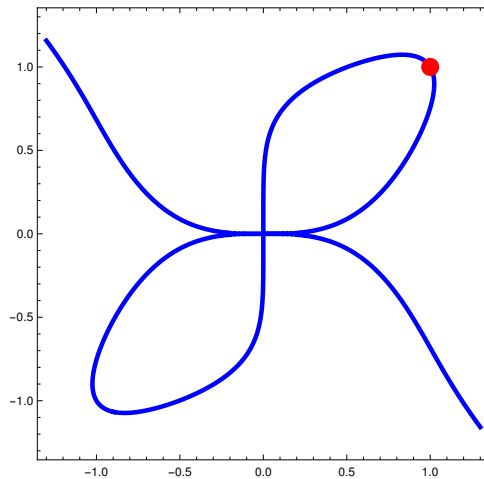
$$\int \frac{1}{(x-1)(x-3)(x-5)} dx .$$

Problem 11) Chain rule (10 points)

The coordinates of a car on a freeway intersection are $x(t)$ and $y(t)$. Use the chain rule to differentiate

$$f(t) = x(t)^7 + y(t)^7 - 2x(t)y(t)^2 .$$

Assume we know $x'(0) = 3$ and $x(0) = 1, y(0) = 1$. Find the derivative $y'(t)$.



Problem 12) Various integration problems (10 points)

Find the anti-derivatives of the following functions:

a) (2 points) $f(x) = \sin^5(x) \cos(x)$.

b) (3 points) $f(x) = \frac{1}{x^2+1} + \frac{1}{x^2-1}$.

c) (2 points) $f(x) = \sqrt{1-x^2} + \frac{1}{\sqrt{1-x^2}}$.

d) (3 points) $f(x) = \log(x) + \frac{1}{\log(x)}$.

| |
|--------------------------------------|
| Problem 13) Applications (10 points) |
|--------------------------------------|

a) (5 points) We know the total cost $F(x) = -x^3 + 2x^2 + 4x + 1$ for the quantity x . In order to find the positive **break-even point** x satisfying $f(x) = g(x)$, where $g(x) = F(x)/x$ is the total cost and $f(x) = F'(x)$ is the marginal cost, we do - how sweet it is - find the maximum of the average cost $g(x) = F(x)/x$. Find the maximum!

b) (5 points) We know the "velocity", "acceleration" and "jerk" as the first second and third derivative of position. The fourth, fifth and sixth derivatives of position as a function of time are called "snap", "crackle" and "pop" according to characters used in a cereal ad. Assume we know the snap $x''''(t) = t$. Find $x(t)$ satisfying $x(0) = x'(0) = x''(0) = 0, x'''(0) = 0$.

