

## 5/7/2020: Final Practice A

Your Name:

- Solutions are submitted as PDF handwritten in a file called after your name. Capitalize the first letters like OliverKnill.pdf. The paper has to **feature your personal handwriting** and contain no typed part. If you like, you can start writing on a new paper. For 1), you could write 1: False, 2: False  $\dots$  20: False. Sign your paper.
- No books, calculators, computers, or other electronic aids are allowed. You can use one page of your own handwritten notes when writing the paper. It is your responsibility to submit the paper on time and get within that time also a confirmation.

1		20
2		10
3		10
4		10
5		10
6		10
7		10
8		10
9		10
10		10
11		10
12		10
13		10
Total:		140

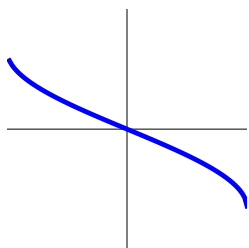
Problem 1) TF questions (20 points). No justifications are needed.

- 1)  T  F  $\cos(17\pi/4) = \sqrt{2}/2$ .
- 2)  T  F The tangent function is monotonically increasing on the open interval  $(-\pi/2, \pi/2)$ .
- 3)  T  F The arccot function is monotonically increasing from  $\pi/4$  to  $3\pi/4$ .
- 4)  T  F If  $f$  is a probability density function, then  $\int_{-\infty}^{\infty} f(x) dx = 0$
- 5)  T  F  $\frac{d}{dx} e^{\log(x)} = 1$ .
- 6)  T  F If  $f''(0) = -1$  then  $f$  has a local maximum at  $x = 0$ .
- 7)  T  F The improper integral  $\int_{-1}^1 1/|x| dx$  is finite.
- 8)  T  F The function  $-\cos(x) - x$  has a root in the interval  $(-100, 100)$ .
- 9)  T  F If a function  $f$  has a local maximum in  $(0, 1)$  then it also has a local minimum in  $(0, 1)$ .
- 10)  T  F The anti derivative of  $1/(1 - x^2)$  is equal to  $\arctan(x)$ .
- 11)  T  F The function  $f(x) = (e^x - e^{2x})/(x - x^2)$  has the limit 1 as  $x$  goes to zero.
- 12)  T  F If you listen to the sound  $e^{-x} \sin(10000x)$ , then it gets louder and louder as time goes on.
- 13)  T  F The function  $f(x) = e^{x^2}$  has a local minimum at  $x = 0$
- 14)  T  F The function  $f(x) = (x^{55} - 1)/(x - 1)$  has the limit 1 for  $x \rightarrow 1$ .
- 15)  T  F If the total cost  $F(x)$  of an entity is extremal at  $x$ , then we have a break even point  $f(x) = g(x)$ .
- 16)  T  F The value  $\int_{-\infty}^{\infty} xf(x) dx$  is called the expectation of the PDF  $f$ .
- 17)  T  F The trapezoid rule is an integration method in which the left and right Riemann sum are averaged.
- 18)  T  F  $\tan(\pi/3) = \sqrt{3}$ .
- 19)  T  F A Newton step for the function  $f$  is  $T(x) = x + \frac{f(x)}{f'(x)}$ .
- 20)  T  F  $\sin(\arctan(1)) = \sqrt{3}$ .

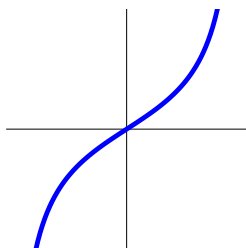
Problem 2) Matching problem (10 points) No justifications needed

(5 points) Match the functions names with their graphs (1-4) their derivatives (A-D) (middle row) and second derivatives (a-d) (last row).

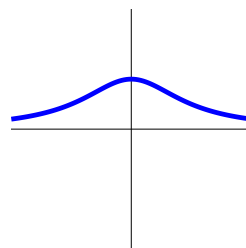
Function	fill in 1)-4)	fill in A)-D)	fill in a)-d)
$\sin(x)/x$			
$\tan(x)$			
$\arcsin(x)$			
$1/(1+x^2)$			



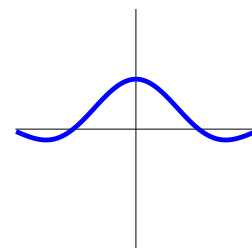
1)



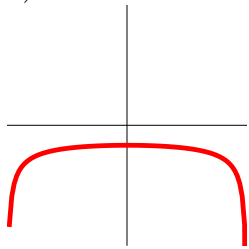
2)



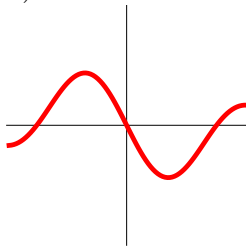
3)



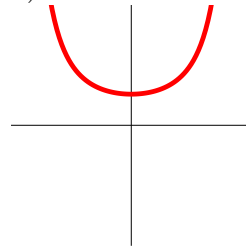
4)



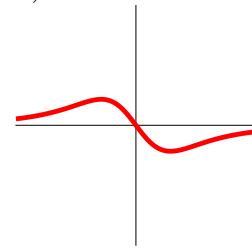
A)



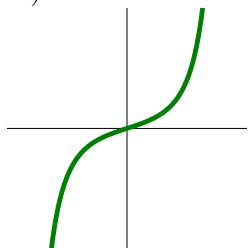
B)



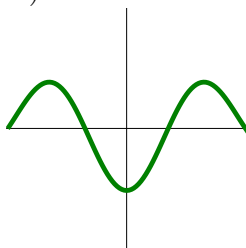
C)



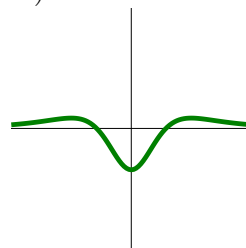
D)



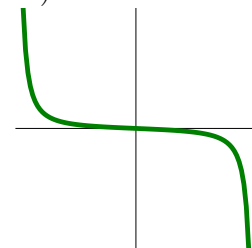
a)



b)



c)




d)

(5 points) Which of the following limits exists in the limit  $x \rightarrow 0$ .

Function	exists	does not exist
$\sin^4(x)/x^4$		
$1/\log x $		
$\arctan(x)/x$		
$\log x /(x-1)$		
$\cos(x)/(x-1)$		
$(x^{10}-1)/(x-1)$		

Problem 3) Matching or short answer problem (10 points). No justifications are needed.

a) (4 points) On the Boston Esplanade is a sculpture of **Arthur Fiedler** (1894-1979) a long-time conductor of the Boston Pops Orchestra. His head is sliced into thin slices. Assume that the thickness of each level is  $h = 1.5$  inch and the area of each of the 100 slices  $k$  is  $A(k)$ . Which formula gives the volume of the head? (One applies.)



Formula	Check if true
$1.5[A(1) + \dots + A(100)]$	<input type="checkbox"/>
$\frac{1}{1.5}[A(1) + \dots + A(100)]$	<input type="checkbox"/>

Formula	Check if true
$1.5[\frac{1}{A(1)} + \dots + \frac{1}{A(100)}]$	<input type="checkbox"/>
$\frac{1.5}{100}[A(1) + \dots + A(100)]$	<input type="checkbox"/>

b) (4 points) The summer has arrived on May 12 2014 for a day before it cooled down again. Harvard students enjoy the **Lampon pool** that day in front of the **Lampon castle**. Assume the water volume at height  $z$  is  $V(z) = 1 + 5z - \cos(z)$ . Assume water evaporates at a rate of  $V'(z) = -1$  gallon per day. How fast does the water level drop at  $z = \pi/2$  meters? Check the right answer: (one applies)



Rate	Check if true
-6	<input type="checkbox"/>
-1/6	<input type="checkbox"/>

Rate	Check if true
-4	<input type="checkbox"/>
-1/4	<input type="checkbox"/>

c) (2 points) Speaking of weather: the temperature on May 13, 2014 in Cambridge was 52 degrees Fahrenheit. The day before, on May 12, the temperature had been 85 degrees at some point and had us all dream about **beach time**. Which of the following theorems assures that there was a moment during the night of May 12 to May 13 that the temperature was exactly 70 degrees? (One applies.)



Theorem	check if true
Mean value theorem	<input type="checkbox"/>
Rolle theorem	<input type="checkbox"/>

Theorem	check if true
Intermediate value theorem	<input type="checkbox"/>
Bolzano theorem	<input type="checkbox"/>

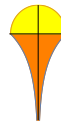
Problem 4) Area computation (10 points)

Find the area enclosed by the graphs of the functions

$$f(x) = \log|x|$$

and

$$g(x) = \sqrt{1-x^2}.$$



Problem 5) Volume computation (10 points)

The lamps near the front entrance of the **Harvard Malkin Athletic Center (MAC)** have octagonal cross sections, where at height  $z$ , the area is

$$A(z) = 2(1 + \sqrt{2})(1 + z)^2$$

with  $0 \leq z \leq 3$ . What is the volume of the lamp?



Problem 6) Improper integrals (10 points)

Which of the following limits  $R \rightarrow \infty$  exist? If the limit exist, compute it.

a) (2 points)  $\int_1^R \sin(2\pi x) dx$

b) (2 points)  $\int_1^R \frac{1}{x^2} dx$

c) (2 points)  $\int_1^R \frac{1}{\sqrt{x}} dx$

d) (2 points)  $\int_1^R \frac{1}{1+x^2} dx$

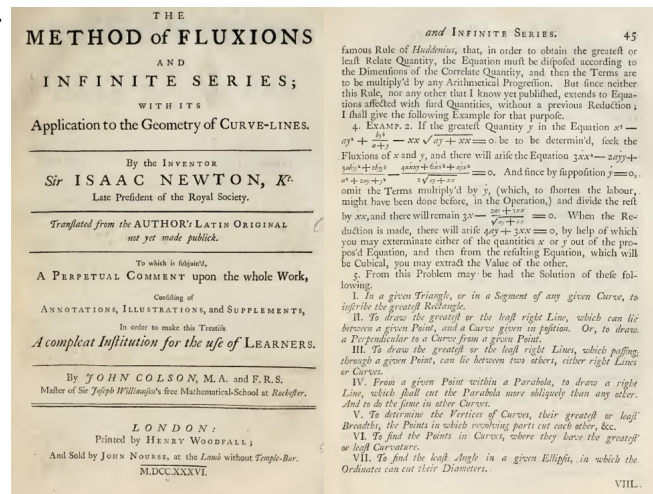
e) (2 points)  $\int_1^R x dx$

Problem 7) Extrema (10 points)

In Newton's masterpiece "The Method of Fluxions" on the bottom of page 45, Newton asks: "In a given triangle or in a segment of any given curve, to inscribe the greatest rectangle." Lets be more specific and find rectangle with largest area

$$A = xy$$

in the triangle given by the x-axis, y-axis and line  $y = 2 - 2x$ . Use the second derivative test to make sure you have found the maximum.



Problem 8) Integration by parts (10 points)

a) (5 points) Find

$$\int (1 + x + x^2 + x^3 + x^4)(\sin(x) + e^x) dx .$$

b) (5 points) Find

$$\int \log(x) \frac{1}{x^2} dx .$$

Problem 9) Substitution (10 points)

a) (5 points) "One,Two,Three,Four Five, once I caught a fish alive!"

$$\int \frac{(1 + 2x + 3x^2 + 4x^3 + 5x^4)}{(1 + x + x^2 + x^3 + x^4 + x^5)} dx .$$

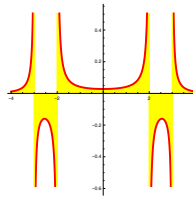
b) (5 points) A “Trig Trick-or-Treat” problem:

$$\int (1 - x^2)^{-3/2} + (1 - x^2)^{-1/2} + (1 - x^2)^{1/2} dx .$$

Problem 10) Partial fractions (10 points)

Integrate

$$\int_{-1}^1 \frac{1}{(x+3)(x+2)(x-2)(x-3)} dx .$$



The graph of the function is shown to the right.

Lets call it the **friendship graph**.

Problem 11) Chain rule. (10 points)

a) Find the derivative of

$$f(x) = (\sin(7x + x \cos(x)) - 3x) .$$

in general.

b) Now evaluate at  $x = 0$ .

Problem 12) Various integration problems (10 points)

a) (2 points)  $\int_0^{2\pi} 2 \cos^2(x) - \sin(x) dx$

b) (2 points)  $\int x^2 e^{3x} dx$

c) (2 points)  $\int_1^{\infty} \frac{1}{(x+2)^2} dx$

d) (2 points)  $\int \sqrt{x} \log(x) dx$

e) (2 points)  $\int_1^e \log(x)^2 dx$

Problem 13) Applications (10 points)

a) (2 points) [**Agnesi density**]

The CDF of the PDF  $f(x) = \pi^{-1}/(1 + x^2)$  is

b) (2 points) [**Piano man**]

The upper hull of  $f(x) = x^2 \sin(1000x)$  is the function

c) (2 points) [**Rower's wisdom**]

If  $f$  is power,  $F$  is work and  $g = F/x$  then  $f = g$  if and only if  $g'(x) =$

d) (2 points) [**Catastrophes**]

For  $f(x) = c(x - 1)^2$  there is a catastrophe at  $c =$

e) (2 points) [**Randomness**]

We can use chance to compute integrals. It is called the method.